

**1**

**OTBET:**

<b>4</b>	<b>3</b>	<b>1</b>	<b>2</b>
<b>2</b>	<b>1</b>	<b>3</b>	<b>4</b>
<b>1</b>	<b>4</b>	<b>2</b>	<b>3</b>
<b>3</b>	<b>2</b>	<b>4</b>	<b>1</b>

4	3	1	2
2	1	3	4
3	2	4	1

**Подсказка:**

В оставшихся клетках  
найди места для  
цифр 1, 2, 3 и 4.




OTBET:


<b>3</b>	<b>4</b>	<b>2</b>	<b>1</b>
<b>1</b>	<b>2</b>	<b>4</b>	<b>3</b>
<b>4</b>	<b>1</b>	<b>3</b>	<b>2</b>
<b>2</b>	<b>3</b>	<b>1</b>	<b>4</b>

3		2	1
1		4	3
4		3	2
2		1	4

**Подсказка:**  
В оставшихся  
клетках найди  
места для  
цифр 1, 2, 3 и 4.



**OTBET:**

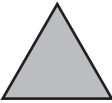






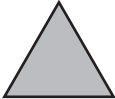















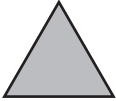


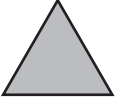



**Подсказка:**

В оставшихся клетках  
найди места для  
таких же знаков.  
Начни с цветка.



**OTBET:**

**Подсказка:**  
Какой фигуры  
не хватает  
в каждом  
из секторов?

